



## Problem of the Week





### Problem A

### Missing Cookies

Janelle and Jean-Paul baked 70 cookies for a school bake sale. They baked five different kinds of cookies and there was an even number of each kind of cookie. When Janelle and Jean-Paul got to school, they realized that they were missing the *sugar* cookies.

Below is a pictograph of the cookies that they brought to the school.

Each  represents 4 cookies.

Cookie Type	Number of Cookies
Chocolate Chip	
Oatmeal Raisin	
Gingerbread	
Sugar	
Coconut Macaroon	

How many *sugar* cookies had they forgotten at home? Complete the pictograph and explain your answer.

